

Algebra 1 – Graphing Quadratics Practice 2

Name: _____

Date: _____ Hour: ____

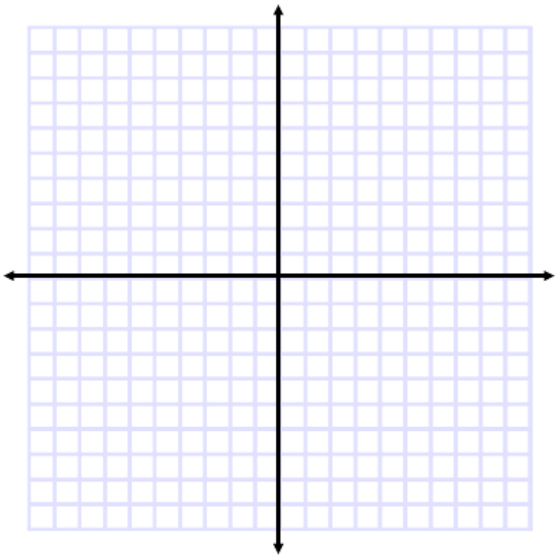
Graph the quadratic: $y = (2x - 1)(4x + 2)$

x-intercept: _____

x-intercept: _____

y-intercept: _____

vertex: _____



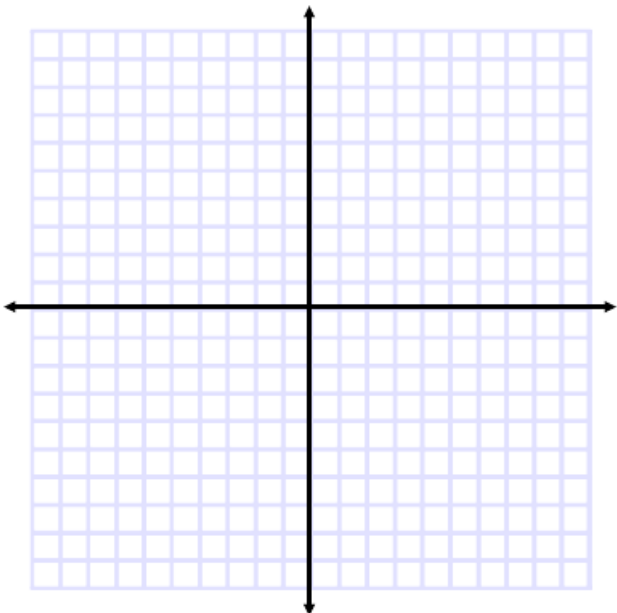
Graph the quadratic: $y = (3x - 4)(3x + 2)$

x-intercept: _____

x-intercept: _____

y-intercept: _____

vertex: _____



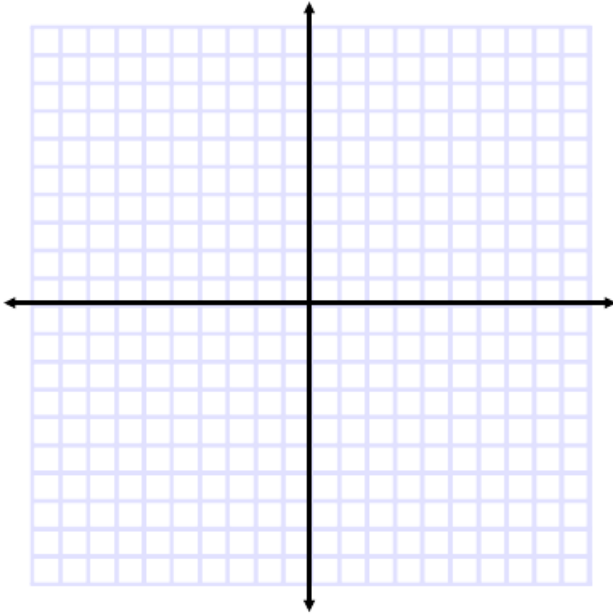
Graph the quadratic: $y = x^2 - 5x - 6$

x-intercept: _____

x-intercept: _____

y-intercept: _____

vertex: _____



Graph the quadratic: $y = x^2 - 5x + 4$

x-intercept: _____

x-intercept: _____

y-intercept: _____

vertex: _____

