

Please get the following materials:

1. New Bell Work
2. Bag of envelopes, green & red squares
3. EastIsland/WestIsland sheet

Bell Work

1/26/2015


Solve the following using your model:

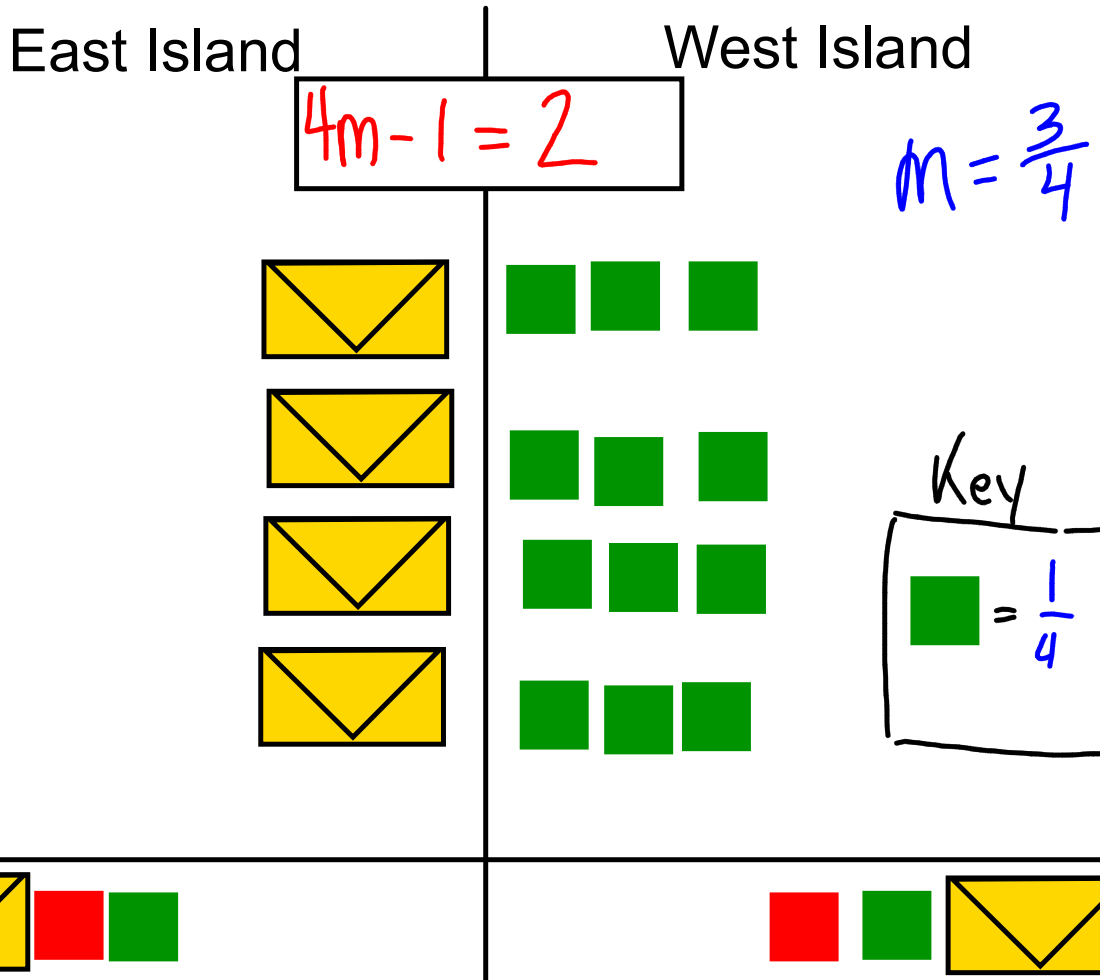
Draw your solution in today's bell work

$$3x - 4 = 8$$

East Island | West Island

$$3x - 4 = 8$$





East Island

West Island

$$2x + 3 = 2$$

$$x = -\frac{1}{2}$$




$\frac{1}{2}$

$\frac{1}{2}$



East Island | West Island

$$-5 + 5x = 0$$



East Island

West Island

$$2x - 7 = 5x + 14$$

